

# PS 349

## 2<sup>nd</sup> Grade Homework

Week of: December 9<sup>th</sup> – 13<sup>th</sup>

MY HOMEWORK WAS CHECKED FOR COMPLETION BY  
MY TEACHER OR TABLE CAPTAIN ON:

MONDAY

TUESDAY

WEDNESDAY

THURSDAY

### MATH

MONDAY – THURSDAY

Complete the Math Review Sheet  
for each night for the correct  
column.

*Show any extra work on the math  
notebook page in packet*

### WRITING

TUESDAY ONLY!

Use the Writing Choice Board to  
complete one writing prompt. Choose  
a different prompt than you did last  
week. Write the name of the prompt  
you choose and the date on the top of  
the page in your notebook.

*Make sure you are writing in full  
sentences!*

### READING & VOCABULARY

Reading: MONDAY – THURSDAY


Read for at least 20 minutes every night!

Make sure to fill out your Reading Log with the date, title  
of the book, and the number of minutes you read. *Have an  
adult sign that they read with you!*

Vocabulary Work: MONDAY & WEDNESDAY ONLY

Use the Spelling Choice Board to complete a  
spelling activity. Write the number of the prompt you  
choose and the date on the top of the page.

*Write on the Vocabulary page in the packet!*





## 2nd Grade Reading Log

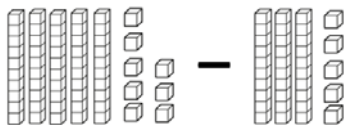
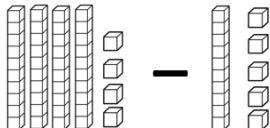
Name: \_\_\_\_\_


[illegible]

Name:

Weekly Math Review - Q2:6

Date:

Monday	Tuesday	Wednesday	Thursday
Write a story problem where the answer is 7. _____ _____ _____	Martha has a marble collection with a total of 18 marbles. 7 of them are red, and the rest are blue. How many marbles are blue?	Write a story problem where the answer is 15. _____ _____ _____	There were 12 cookies on a tray. Samantha and her friends ate some of the cookies. There were 3 cookies left over. How many cookies did they eat?
How many tens are there in 220?	543 is the same as ____ ones ____ tens ____ hundreds	Write the number. <div style="border: 1px solid black; width: 100px; height: 30px; display: inline-block;"></div> 12 ones 6 tens 2 hundreds	Fill in the blank.  19 tens is the same as ____.
Count forward by fives. 178, _____, _____, _____	Count forward by tens. 790, _____, _____, _____	Count forward by hundreds. 801, _____, _____, _____	Count forward by fives. 365, _____, _____, _____
Write the number in <b>standard</b> form. <div style="border: 1px solid black; width: 100px; height: 30px; display: inline-block;"></div> 700 + 1	Write the number 478 in <b>word</b> form. _____ _____	Write seven hundred three in <b>standard</b> form.	Write 295 in <b>expanded</b> form.
Compare the numbers using > < = 153 <div style="border: 1px solid black; border-radius: 50%; width: 60px; height: 60px; display: inline-block;"></div> 113	Compare the numbers using > < = 660 <div style="border: 1px solid black; border-radius: 50%; width: 60px; height: 60px; display: inline-block;"></div> 66	Compare the numbers using > < = 287 <div style="border: 1px solid black; border-radius: 50%; width: 60px; height: 60px; display: inline-block;"></div> 287	Compare the numbers using > < = 404 <div style="border: 1px solid black; border-radius: 50%; width: 60px; height: 60px; display: inline-block;"></div> 440
Solve. 8 + 2 = ____ 18 - 12 = ____ 18 - 6 = ____ 7 + 10 = ____ 4 + 12 = ____ 14 - 5 = ____	Solve. 8 + 8 = ____ 6 + 2 = ____ 9 + 9 = ____ 4 + 6 = ____ 3 + 7 = ____ 8 + 4 = ____	Solve. 9 + 11 = ____ 12 - 9 = ____ 15 - 6 = ____ 11 + 1 = ____ 3 + 15 = ____ 16 - 16 = ____	Solve. 5 + 8 = ____ 6 + 8 = ____ 9 + 2 = ____ 5 + 9 = ____ 8 + 5 = ____ 4 + 3 = ____
Use a strategy to find the sum of 29 + 32.	Use a strategy to find the sum of 83 + 17.	Use a strategy to find the sum of 65 + 44.	Use a strategy to find the sum of 19 + 40.
What subtraction problem is shown below?  What is the answer?	What subtraction problem is shown below?  What is the answer?	Draw and use base ten blocks to solve 65 - 22.	Use the blank numberline below to solve 55 - 28.



# Math

*Use this sheet as scrap paper to show work and solve.*

# DECEMBER

NAME:

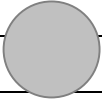
men

<b>1</b> I'm most excited about Christmas break because...	<b>2</b> Think about your family traditions. What is your favorite family tradition & why?	<b>3</b> December is known for giving. Think of one person who you believe could use a friend. Tell how you will be a good friend to this person.
<b>4</b> "On Christmas, I always..."	<b>5</b> This school year is half over. Why has this year been great so far?	<b>6</b> "I am looking forward to _____ in 2020, because..."

## 3 NATIONAL DAYS OF December

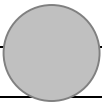
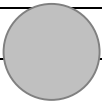
December 8 <sup>th</sup>	December 12 <sup>th</sup>	December 25 <sup>th</sup>
<b>7</b> National Brownie Day - Write a recipe on how to make brownies.	<b>8</b> National Gingerbread Day - Describe who you would make your own gingerbread house in as much detail as possible!	<b>9</b> December 25 <sup>th</sup> is Christmas Day. Describe your favorite holiday tradition you do with your family.

# Writing



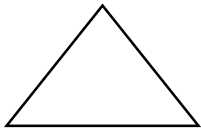
Choice Picked: #\_\_\_\_

Date: \_\_\_\_\_



# Spelling Choice Board

**Directions:** Each night, pick a spelling activity to complete from the board, in your homework notebook.

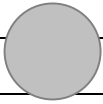
1. Use each spelling word in a sentence and <u>underline</u> each spelling word.	2. Rainbow Writing: Write each spelling word in three different colors.	3. Put all the spelling words in alphabetical order.
4. Write each spelling word in pyramid formation. 	5. Write each spelling word three times in your best handwriting.	6. Write your spelling words using red for consonants and blue for vowels.
7. Write your spelling words and illustrate them.	8. Create a set of flashcards to study your spelling words.	9. Write a story that uses at least 3 of your spelling words and <u>underline</u> each spelling word.

## Spelling Words:

1. to
2. two
3. too
4. their
5. there
6. they're

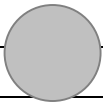
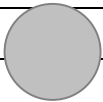


# Vocabulary

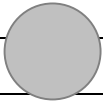


Choice Picked: #\_\_\_\_

Date: \_\_\_\_\_



# Vocabulary



Choice Picked: #\_\_\_\_

Date: \_\_\_\_\_

